

FOR OFFICIAL USE

--	--	--	--	--	--

Total marks

--

X056/101

NATIONAL
QUALIFICATIONS
2000

THURSDAY, 25 MAY
9.00 AM – 9.35 AM

**MATHEMATICS
INTERMEDIATE 1
Paper 1
(Non-calculator)**

Fill in these boxes and read what is printed below.

Full name of centre

--

Town

--

Forename(s)

--

Surname

--

Date of birth

Day Month Year

--	--	--	--	--	--	--	--

Scottish candidate number

--	--	--	--	--	--	--	--	--	--

Number of seat

--

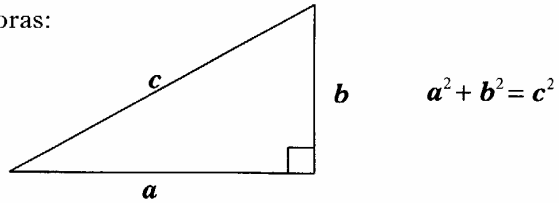
- You may NOT use a calculator.**
- There are three Sections in this paper.
 - Section A assesses the compulsory units **Mathematics 1 and 2.**
 - Section B assesses the optional unit **Mathematics 3.**
 - Section C assesses the optional unit **Applications of Mathematics.**

Candidates must attempt **all** questions in Section A (Mathematics 1 and 2) **and either** Section B (Mathematics 3) **or** Section C (Applications of Mathematics).
- Write your working and answers in the spaces provided. Additional space is provided at the end of this question-answer book for use if required. If you use this space, write clearly the number of the question involved.
- Full credit will be given only where the solution contains appropriate working.
- Before leaving the examination room you must give this book to the invigilator. If you do not you may lose all the marks for this paper.

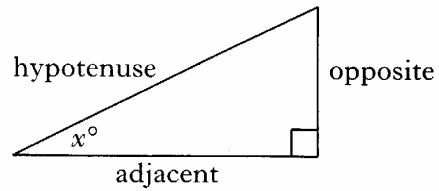
FORMULAE LIST

Circumference of a circle: $C = \pi d$
Area of a circle: $A = \pi r^2$
Curved surface area of a cylinder: $A = 2\pi r h$

Theorem of Pythagoras:



Trigonometric ratios
in a right angled
triangle:



$$\tan x^\circ = \frac{\text{opposite}}{\text{adjacent}}$$
$$\sin x^\circ = \frac{\text{opposite}}{\text{hypotenuse}}$$
$$\cos x^\circ = \frac{\text{adjacent}}{\text{hypotenuse}}$$

SECTION A (Mathematics 1 and 2)

ALL candidates should attempt this Section.

Marks

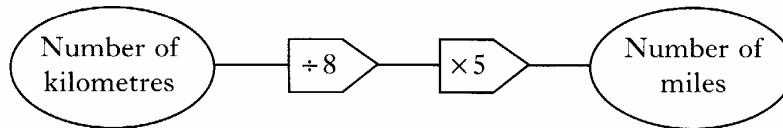
A1. (a) Find 25% of £300.

1

(b) Find $\frac{2}{3}$ of £6.99.

1

A2. The Anderson family use this rule to convert distances from kilometres to miles.



They are travelling to Bordeaux when they pass this road sign.

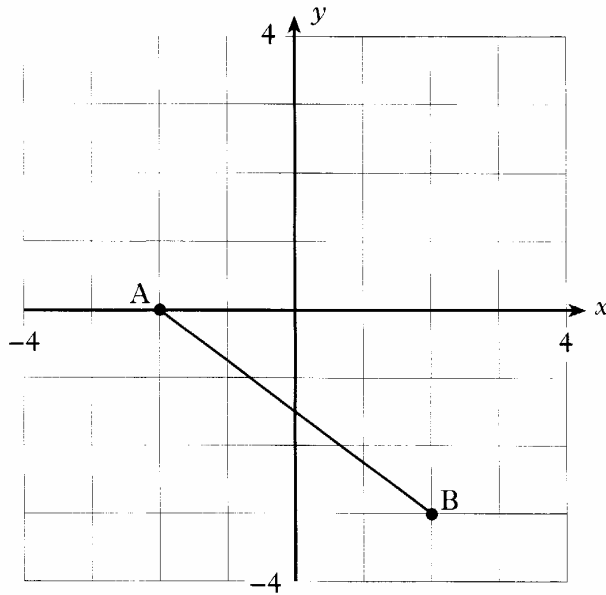
How many **miles** have they to travel to Bordeaux?

2

[Turn over

Marks

A3. (a) Write down the coordinates of the points A and B marked on this diagram.



(b) Calculate the length of the line joining A to B.
Do not measure with a ruler.
You must show your working.

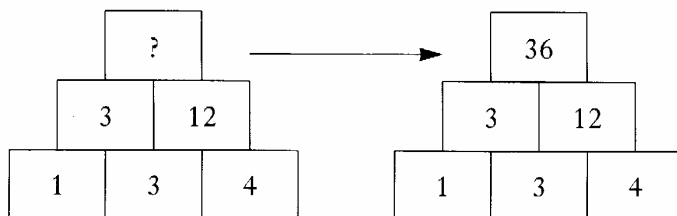
2

4

Marks

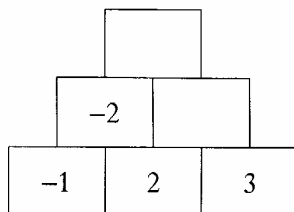
A4. Rule: The number in a box is always equal to the two numbers in the boxes below it multiplied together.

Example



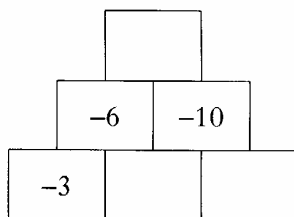
Use the rule to complete the diagrams below.

(a)



2

(b)



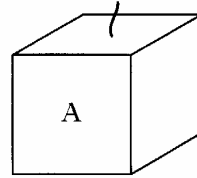
3

[Turn over

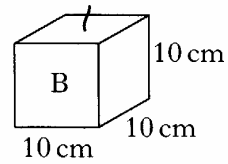
Marks

- A5.** The diagram below shows two candles.
Each candle is in the shape of a cube.
The length of time that each candle will burn is proportional to its volume.

Candle A has a volume of 1500 cm^3 .
It will burn for 30 hours.



For how long will candle B burn?



4

[END OF SECTION A]

**Candidates should now attempt
EITHER Section B (Mathematics 3) on Pages seven and eight
OR Section C (Applications of Mathematics) on Pages nine to twelve.**

Marks

SECTION B (Mathematics 3)

**ONLY candidates doing the course Mathematics 1, 2 and 3
should attempt this Section.**

B6. (a) Solve algebraically the equation

$$5x + 1 = x + 7.$$

3

(b) Solve algebraically the inequality

$$6y - 1 < 11.$$

2

B7. Factorise

$$3x - 12.$$

2

[Turn over

Marks

B8. Multiply out the brackets and simplify

$$7(2a + 1) - 3a.$$

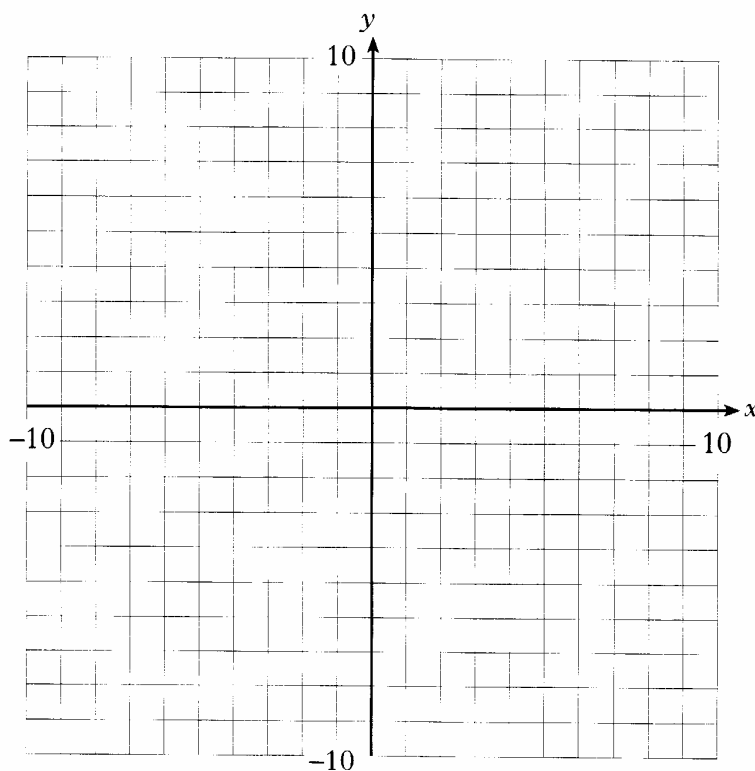
2

B9. (a) Complete the table below for $y = 3x - 2$.

x	-2	0	3
y			

2

(b) Using the table in part (a), draw the graph of $y = 3x - 2$ on the grid.



2

[END OF SECTION B]

Marks

SECTION C (Applications of Mathematics)

ONLY candidates doing the course Mathematics 1, 2 and Applications of Mathematics should attempt this Section.

C6. A shop uses a spreadsheet to work out the value of the stock.

	A	B	C	D
1	Item	Number	Price of	Total value
2		in stock	item in £	in £
3	Chocolate bars	23	0.24	5.52
4	Crisps	61	0.25	15.25
5	Cartons of orange juice	19	0.30	5.70
6	Apples	5	0.21	1.05
7	Small bottles of cola	41	0.28	11.48
8	Bananas	8	0.18	
9				
10		Total value of stock		
11				

- (a) The owner wants to work out the total value of the bananas.
What formula does she use in cell D8 to find this?

1

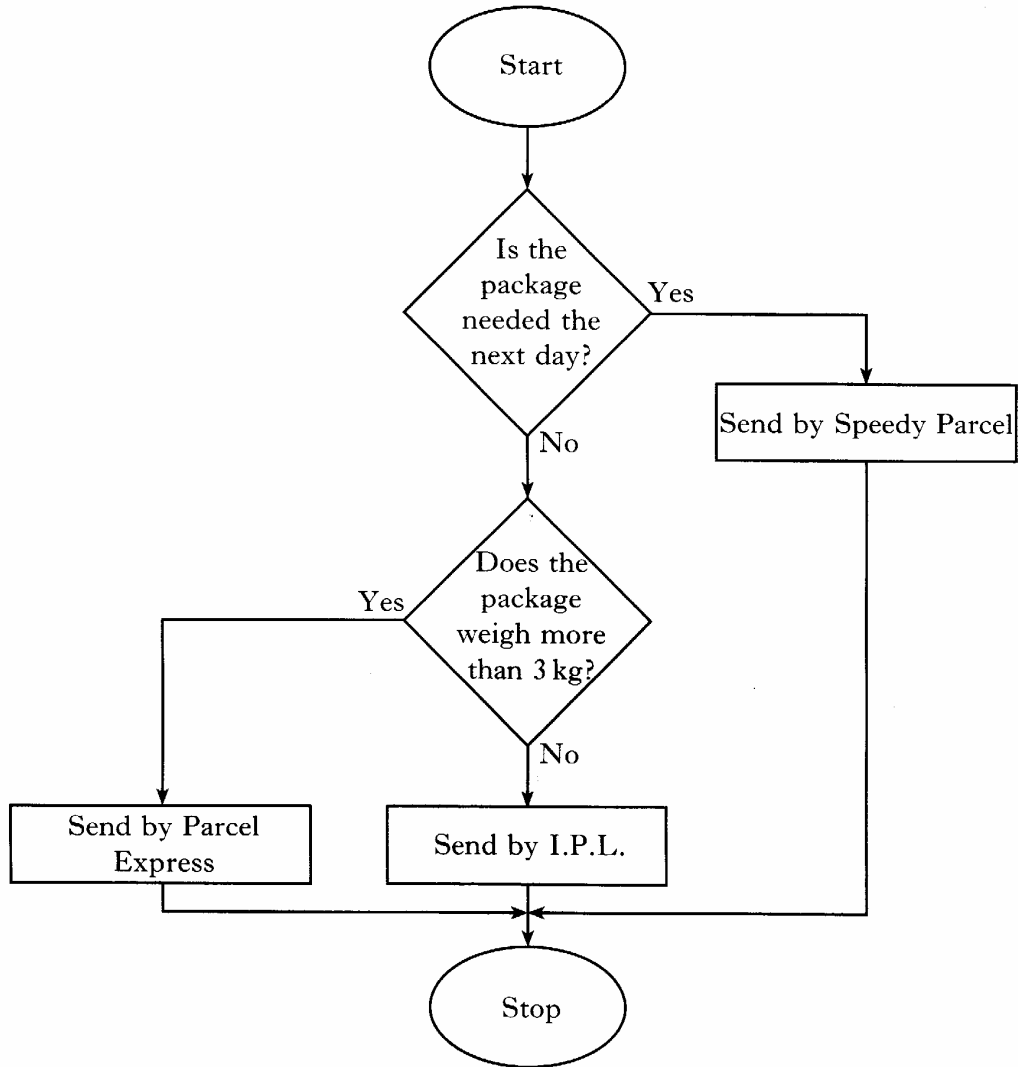
- (b) What formula would she put into cell D10 to work out the total value of all of the stock?

1

[Turn over

Marks

C7. A computer supply company uses a flowchart to decide how to deliver packages to their customers.



They are going to send a package weighing 3.8 kg which is not needed the next day. Which delivery service do they choose?

Explain your answer.

2

Marks

- C8.** Army cadets set off on a training exercise from a camp at C.
- They walk for 8 kilometres on a bearing of 048° from position C until they reach a bridge at B.
- At the bridge they change direction and walk for a further 5 kilometres on a bearing of 142° from B, arriving at D.
- (a) Make a scale drawing of this walk.



- (b) Use your scale drawing to find the direct distance from C to D.

3

2

[Turn over for Question C9 on Page twelve

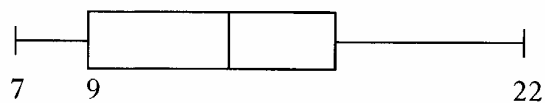
Marks

- C9.** A group of students sat a Mathematics test.
The marks scored in the test are shown below.

8 8 9 10 14 11 15 7 16 19 22 11 16 17 18

- (a) Find the median mark.

- (b) Complete the boxplot, drawn below, to show the marks scored by the students in the Mathematics test.



[END OF SECTION C]

[END OF QUESTION PAPER]

2

2

FOR OFFICIAL USE

--	--	--	--	--	--

Total
marks

--

X056/102

NATIONAL
QUALIFICATIONS
2000

THURSDAY, 25 MAY
9.55 AM – 10.50 AM

MATHEMATICS
INTERMEDIATE 1
Paper 2

Fill in these boxes and read what is printed below.

Full name of centre

--

Town

--

Forename(s)

--

Surname

--

Date of birth

Day Month Year

--	--	--	--	--	--	--	--

Scottish candidate number

--	--	--	--	--	--	--	--	--	--

Number of seat

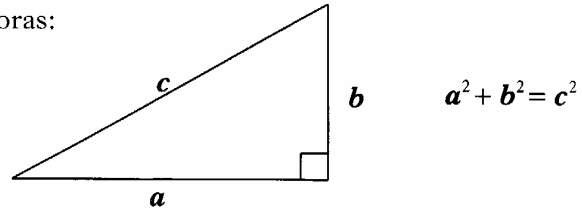
--

- You may use a calculator.**
- There are three Sections in this paper.
Section A assesses the compulsory units **Mathematics 1 and 2**.
Section B assesses the optional unit **Mathematics 3**.
Section C assesses the optional unit **Applications of Mathematics**.
Candidates must attempt **all** questions in Section A (**Mathematics 1 and 2**) and **either** Section B (**Mathematics 3**)
or Section C (**Applications of Mathematics**).
- Write your working and answers in the spaces provided. Additional space is provided at the end of this question-answer book for use if required. If you use this space, write clearly the number of the question involved.
- Full credit will be given only where the solution contains appropriate working.
- Before leaving the examination room you must give this book to the invigilator. If you do not you may lose all the marks for this paper.

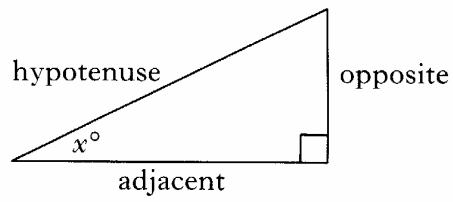
FORMULAE LIST

Circumference of a circle: $C = \pi d$
Area of a circle: $A = \pi r^2$
Curved surface area of a cylinder: $A = 2\pi r h$

Theorem of Pythagoras:



Trigonometric ratios
in a right angled
triangle:



$$\tan x^\circ = \frac{\text{opposite}}{\text{adjacent}}$$
$$\sin x^\circ = \frac{\text{opposite}}{\text{hypotenuse}}$$
$$\cos x^\circ = \frac{\text{adjacent}}{\text{hypotenuse}}$$

SECTION A (Mathematics 1 and 2)

ALL candidates should attempt this Section.

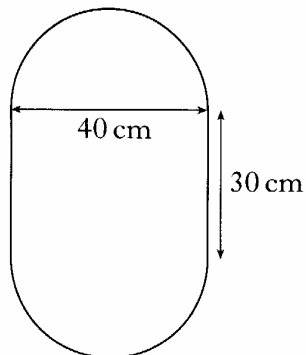
A1.

ALBION BANK PLATINUM ACCOUNT	
Amount	Annual Rate of Interest
Up to £1000	2.5%
£1001–£5000	3.6%
£5001–£10 000	4.7%

Maxine invests £2000 in a Platinum Account with the Albion Bank.
Calculate the interest she should receive after 4 months.

4

- A2. This mirror is in the shape of a rectangle with semi-circular ends.
It has a wooden edge all the way round the outside.



Calculate the total length of the wooden edge.
Give your answer to the nearest centimetre.

5

- A3.** David ordered a bouquet of flowers from “Teleflora” for his mother’s birthday.

Marks

- The bouquet consisted of 12 flowers.
- The bouquet contained both roses and carnations.
- More than half of the flowers in the bouquet were roses.

One combination of roses and carnations in the bouquet is shown in the table below.

<i>Roses</i>	<i>Carnations</i>
10	2

- (a) Complete the table to show all the possible combinations of roses and carnations in the bouquet.

2

- (b) Teleflora’s prices are shown below.

Roses	£2.50 each
Carnations	£1.00 each
Packaging and delivery	£5.00

David’s bill for the bouquet was £29, including packaging and delivery.

How many roses and how many carnations were in the bouquet?

You must show your working.

3

Marks

- A4.** This table shows the **monthly premiums** charged by three companies for every £10 000 worth of life assurance cover.

<i>Monthly Premium for £10 000 worth of cover (Age 30 next birthday)</i>		
	<i>Women</i>	<i>Men</i>
General Alliance	£18.50	£24.60
Insure Direct	£14.60	£21.90
Regal Life	£19.15	£25.85

- (a) Cameron Clarke is 29 years old.
He takes out a £75 000 life assurance policy with Insure Direct.
Calculate his monthly premium.

3

- (b) His wife Catriona is also 29 years old.
She has a £10 000 life assurance policy with General Alliance.
How much will she save per **year** if she changes her insurance company to Insure Direct?

2

[Turn over

Marks

A5. The film *Space Trek* was shown ten times during one week at the Globe cinema.

The stem and leaf diagram below indicates the attendance figures.

**Attendance Figures
Space Trek**

4	1 7 8
5	2 3 5 6
6	0 4
7	5

5 | 2 represents 52 people

(a) What was the minimum attendance at a single showing of *Space Trek* during the week?

(b) Calculate the range of the attendance figures.

1

2

Marks

A5. (continued)

(c) *Castle of Horror* was also shown ten times at the Globe cinema during the same week.

The stem and leaf diagram below indicates the attendance figures for both films.

Attendance Figures

Castle of Horror Space Trek

8	4	1 7 8
4 0	5	2 3 5 6
1 1 1	6	0 4
7 6 5 3	7	5

5 | 2 represents 52 people

Compare the distribution of attendance figures for *Castle of Horror* and *Space Trek*.

1

A6. On the flight home from a holiday in Portugal, the air steward asked the passengers to donate to charity any Portuguese money that they had left.

The steward collected 29 600 escudos.

The exchange rate was 301 escudos to the pound sterling.

How much did the passengers donate?

Give your answer in pounds and pence.

3

[Turn over

Marks

A7. This frequency table shows the ages of the 40 members of a drama club.

<i>Member's Age (years)</i>	<i>Frequency</i>
23	8
24	12
25	6
26	10
27	4

(a) Calculate the mean age of the members.

2

(b) Find the probability that a member is 25 years old.

1

(c) What percentage of the members are under 26 years old?

3

Marks

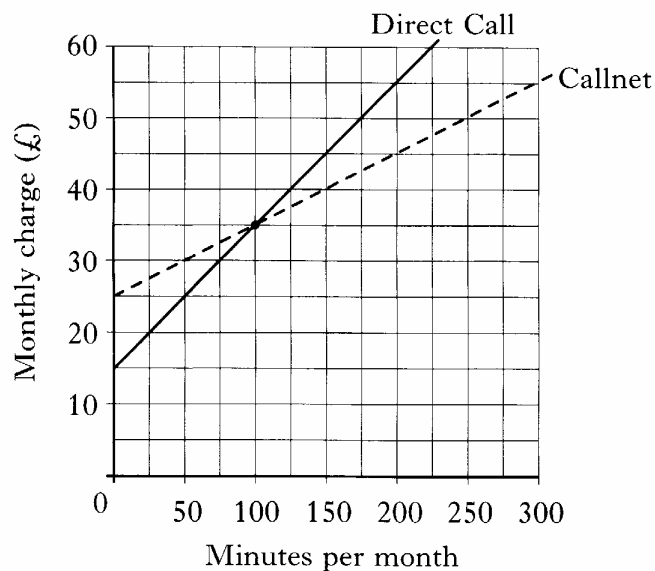
- A8.** The mean weight of the four students listed in the table is 57.5 kilograms.

Name	Weight (kg)
Chris	57
Lee	62
Jo	55
Pat	

Calculate Pat's weight.

2

- A9.** This graph shows the monthly charge for renting mobile telephones from two companies, **Direct Call** and **Callnet**.



Samantha wants to rent a mobile telephone from one of these companies. Use the information in the graph to give Samantha reasons on which to base her choice of company.

3

[END OF SECTION A]

Candidates should now attempt

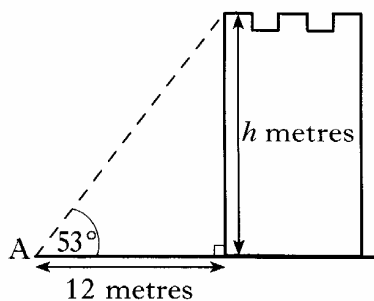
EITHER Section B (Mathematics 3) on *Pages ten and eleven*

OR Section C (Applications of Mathematics) on *Pages twelve and thirteen*

SECTION B (Mathematics 3)

ONLY candidates doing the course Mathematics 1, 2 and 3 should attempt this Section.

- B10.** Point A is 12 metres from the bottom of a tower.
The angle of elevation from A to the top of the tower is 53° .



Calculate the height of the tower, h metres, correct to 1 decimal place.

4

Marks

- B11.** (a) The population of Europe is 580 million.
Write this number in standard form.

2

- (b) The distance, S metres, travelled by a falling object in t seconds is given by the formula

$$S = \frac{1}{2}gt^2.$$

Calculate the value of S when $g = 9.8$ and $t = 10$.

3

[END OF SECTION B]

[Turn over

Marks

SECTION C (Applications of Mathematics)

ONLY candidates doing the course Mathematics 1, 2 and Applications of Mathematics should attempt this Section.

C10. The table shows the monthly payments to be made with and without loan protection when money is borrowed to buy a car.

Car Loan Table						
Amount borrowed	12 months		24 months		36 months	
	with loan protection	without loan protection	with loan protection	without loan protection	with loan protection	without loan protection
£9000	£901.68	£818.50	£520.37	£438.10	£394.47	£309.15
£6000	£608.19	£553.78	£351.23	£295.60	£269.00	£213.14
£4000	£407.28	£368.02	£233.98	£196.86	£181.22	£142.25
£2000	£202.94	£184.15	£117.50	£99.90	£88.68	£70.05
£1000	£100.99	£92.76	£60.00	£51.30	£45.07	£34.88

Barbara wants to borrow £4000 over 36 months **with loan protection**.

(a) State her monthly payment.

1

(b) Calculate her total repayment.

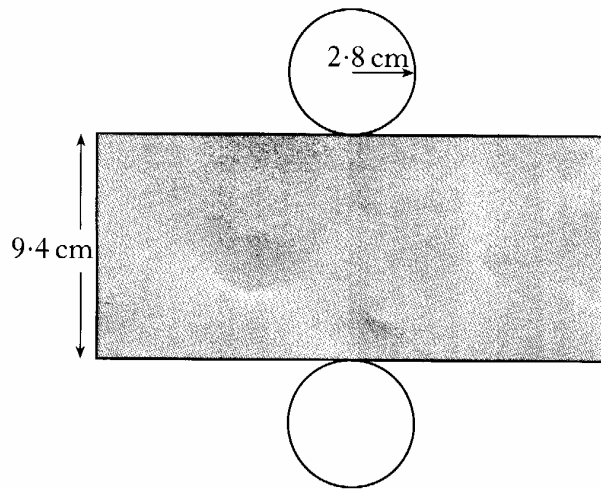
1

(c) Calculate how much this loan costs Barbara.

2

Marks

C11. The diagram below shows the net of a solid shape.



(a) Name the solid shape.

(b) Calculate the curved surface area of the solid shape.
Give your answer correct to 1 decimal place.

1

4

[END OF SECTION C]

[END OF QUESTION PAPER]